



School Level Examination  
SLE 2023

GRADE  
2

SCIENCE

Subject Code: 

3	0	1
---	---	---

Total Questions: 30

Time: 1 hour

**DO NOT OPEN THIS BOOKLET UNTIL INSTRUCTED TO DO SO**

- All questions are compulsory.
- Read the instructions on the **ANSWER SHEET** and fill in your **NAME, CLASS** and **OTHER INFORMATION**.
- To mark your choice of answer by darkening the circles in the **ANSWER SHEET**, use an **HB PENCIL** only.
- You **MUST** record your answers on the **ANSWER SHEET** only.
- There are **30 MULTIPLE CHOICE QUESTIONS**. Use the information provided to choose the **BEST** possible answer among the four options. On your **ANSWER SHEET** fill in the circle that matches your answer.
- Marks are **NOT** deducted for incorrect answers.
- Return the **ANSWER SHEET** to the invigilator at the end of the examination.
- You are **NOT** allowed to use a calculator. You may use a ruler and spare paper for rough work.

This question paper contains a total of 30 questions divided into three sections - A, B and C.

Section A (Logical Reasoning)

1. The position of B from right in the given word is \_\_\_\_\_.

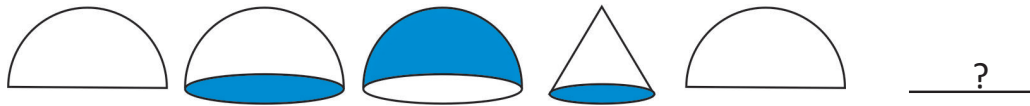
P R O B L E M S


- (A) Fifth (B) Fourth  
(C) Sixth (D) Seventh

2. I have 2 in the ones' place. I am less than 14 but greater than 11. What number am I?

- (A) 21 (B) 12  
(C) 22 (D) None of these

3. What will be the next figure?

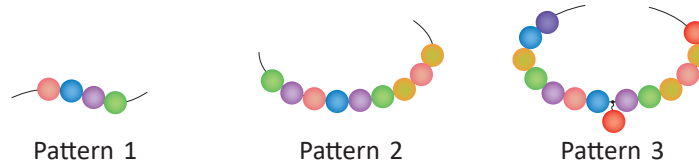


- (A)  (B)   
(C)  (D) 

4. There are 50 boys and 80 girls in a school. How many students are there altogether in the school?

- (A) 120 (B) 150  
(C) 130 (D) 160

5. Study the patterns 1, 2 and 3. Using the same pattern, tell the number of beads in pattern 6.





- (A) 19 (B) 29  
(C) 22 (D) 24

Section B (Subject Specific)

6. On which of the following occasions does the Prime Minister of India hoist the National Flag at Red Fort in Delhi?
- (A) Republic day (B) Gandhi Jayanti  
(C) Independence Day (D) None of these
7. From the given picture, identify the type of means of transport.



- (A) Air Transport (B) Water Transport  
(C) Land Transport (D) All of these
8. Select the option that is not a fruit.



9. From the given list select the things that cannot move by themselves.

Cow, Bus, Cup, Pen, Fish, Boy, Computer, Eraser, Frog, Dog, Book, Bottle, Bird

- (A) Seven (B) Ten  
(C) Five (D) Nine
10. Read the following statements and select the correct one.
- (A) Muscles are soft and fleshy.  
(B) Skeleton gives shape to our body.  
(C) Brain is a delicate body part that is protected by bones.  
(D) All of these

11. Which of the following organs pumps blood in our body?  
(A) Stomach (B) Heart  
(C) Kidneys (D) Brain
12. Renu saw a small frog in her washroom. She took a polybag and a dustpan to move the small frog out of the washroom. Which of the following is a living thing?  
(A) Washroom (B) Small frog  
(C) Polybag (D) Dustpan
13. Choose the statement that is the best description of both the images.







- (A) These plants have woody stems.  
(B) These plants have weak stems and they need support to grow.  
(C) These plants have strong stems as they both are shrubs.  
(D) These plants have trunks.
14. Which of the following fibers is thick, soft, and also absorbs heat to keep our body warm?  
(A) Wool (B) Cotton  
(C) Silk (D) Jute
15. Our Solar System consists of Sun, planets and moons. What is the position of Earth from the Sun?  
(A) 4 (B) 2  
(C) 3 (D) 1
16. Stick is hard and straight. It cannot be bent. Our body too has such a structure. Identify it.  
(A) Muscles (B) Hair  
(C) Bones (D) Blood
17. While going to school Ram wears a tie. Which of the following body parts is used for wearing a tie?  
(A) Shoulder (B) Forehead  
(C) Neck (D) Hand

18. Shashank has long hair, and his mother told him to have a haircut. To which of the following should he go for the haircut?

- (A) Grocerer (B) Barber  
(C) Carpenter (D) Tailor

19. Match the following column I with column II and select the correct option.

Column I	Column II
(P) 	(1) Pumps blood around the body
(Q) 	(2) Help us to breathe
(R) 	(3) Control center of our body
(S) 	(4) Helps us to digest food

- (A) P -1, Q-2, R-3, S-4 (B) P -3, Q-4, R-1, S-2  
(C) P -2, Q-1, R-3, S-4 (D) P -1, Q-2, R-4, S-3

20. Look at the given pictures. Identify the category of food they belong to.



Pizza



Samosa



Cold drink

- (A) Healthy food (B) Junk food  
(C) Protective food (D) None of these

21. Select the correct statement while travelling.

- (A) Getting into the bus in a proper line. (B) Disturbing the driver while driving.  
(C) Moving out of the running bus. (D) Taking the hands out of the bus.

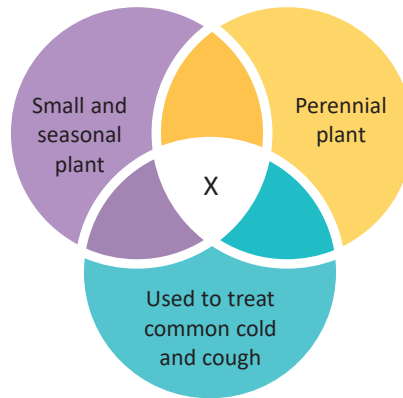
22. Pick the odd one out from the following groups and then choose the correct option.

Living things: Electric Bulb, Plant, Flower, Cat, Television, Fish

Non-living things: Flower vase, Table, Bird, Dog, Book

- (A) Electric Bulb; Flower (B) Plant; Table  
(C) Electric Bulb, Television; Bird, Dog (D) Cat, Fish; Table, Bird

23. Refer to given Venn diagram and select the correct option that will replace X.



- (A) Pea (B) Coriander  
(C) Tulsi (D) Rose

24. Shanu went to market to purchase some milk products. From the given marketing list, trace the item which is NOT made up of milk.

- (A) Curd (B) Eggs  
(C) Ice cream (D) Cheese

**Marketing List**

1. Cheese
2. Curd
3. Eggs
4. Butter
5. Milk
6. Ice cream

25. Select the correct option to identify the phases of moon.



- (A) p-Full moon, q-Waning quarter, r-Waning crescent, s-New moon  
(B) p-Old moon, q-Waning quarter, r-Waning crescent, s-Full moon  
(C) p-Full moon, q-Waning crescent, r-Waning quarter, s-Old moon  
(D) p-Full moon, q-Old moon, r-Waning crescent, s- Waning quarter

**Section C (Competency Enhancement)**

26. While playing inside the house Priya got hurt from table and started bleeding. Priya should \_\_\_\_\_ .

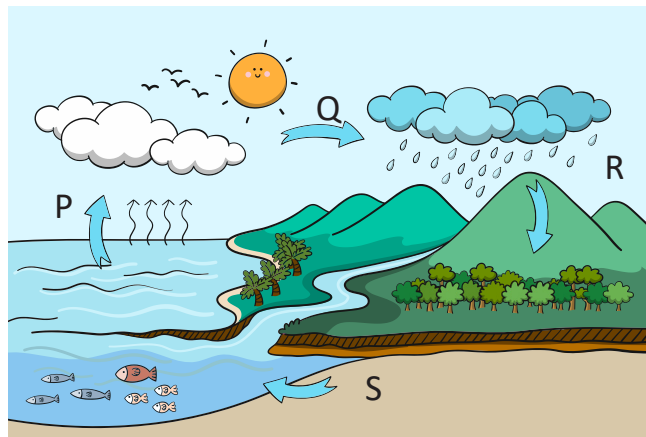
- (A) Call an adult for help (B) Run here and there  
(C) Call police (D) Sit and do nothing

27. Seema was going to visit doctor for her routine checkup. Which sign will she likely to come across?



(D) None of these

28. Rohan's mother put some clothes to dry. Which of the following processes of water cycle is responsible for drying of wet clothes?



(A) P

(B) Q

(C) R

(D) S

29. Ram felt that there was LPG gas leakage in his house. In such condition he should \_\_\_\_\_.

(A) Light a matchstick

(B) Open all the doors and windows of his house

(C) Inform someone elder in his house

(D) Both (B) and (C)

30. Read the given statements and select the correct option.

**Statement 1:** Raincoat is worn in rainy season.

**Statement 2:** Raincoat does not let water inside and keep our clothes dry.

(A) Both statements 1 and 2 are correct.

(B) Both statements 1 and 2 are incorrect.

(C) Statement 1 is correct but 2 is incorrect.

(D) Statement 1 is incorrect but 2 is correct.

