



School Level Examination  
SLE 2023

GRADE  
1

SCIENCE

Subject Code: 

3	0	1
---	---	---

Total Questions: 30

Time: 1 hour

**DO NOT OPEN THIS BOOKLET UNTIL INSTRUCTED TO DO SO**

- All questions are compulsory.
- Read the instructions on the **ANSWER SHEET** and fill in your **NAME, CLASS** and **OTHER INFORMATION**.
- To mark your choice of answer by darkening the circles in the **ANSWER SHEET**, use an **HB PENCIL** only.
- You **MUST** record your answers on the **ANSWER SHEET** only.
- There are **30 MULTIPLE CHOICE QUESTIONS**. Use the information provided to choose the **BEST** possible answer among the four options. On your **ANSWER SHEET** fill in the circle that matches your answer.
- Marks are **NOT** deducted for incorrect answers.
- Return the **ANSWER SHEET** to the invigilator at the end of the examination.
- You are **NOT** allowed to use a calculator. You may use a ruler and spare paper for rough work.


SCIENCE

This question paper contains a total of 30 questions divided into three sections - A, B and C.

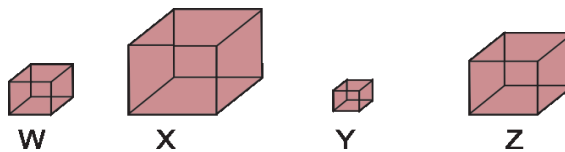
Section A (Logical Reasoning)

1. If you get up at 6 o'clock in the morning and take 2 hours to get ready, you are ready for school at \_\_\_\_\_.
- (A) 7 o'clock (B) 6 o'clock  
(C) 8 o'clock (D) 9 o'clock

2. Ram has ₹ 5 + ₹ 2 + ₹ 10. How much money will he be left with after buying the doll?



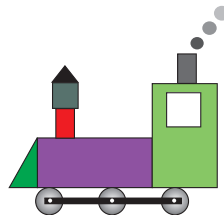
- (A) ₹ 1 (B) ₹ 2  
(C) ₹ 5 (D) ₹ 10
3. Arrange the given boxes from the largest to the smallest.



- (A) W, X, Y, Z (B) X, Y, Z, W  
(C) X, Z, W, Y (D) X, Z, Y, W
4. Complete the pattern.

AC, DF, GI, \_\_\_\_\_

- (A) KL (B) JL  
(C) IJ (D) LM
5. How many rectangles are there in the given figure?



- (A) 2 (B) 6  
(C) 5 (D) 4

Section B (Subject Specific)

6. Which of the following is/are correct parts of arm?  
 (A) Elbow (B) Hand  
 (C) Fingers (D) All of these
7. Match the column I with column II and select the correct option.

	Column I		Column II
P.	Mango	(i)	Milk product
Q.	Cauliflower	(ii)	Junk food
R.	Paneer	(iii)	Fruit
S.	Burger	(iv)	Vegetable

- (A) P-(iii); Q-(iv); R-(i);S-(ii) (B) P-(i);Q-(iii);R-(iv);S-(ii)  
 (C) P-(iv); Q-(ii); R-(iii);S-(i) (D) P-(i); Q-(ii); R-(iii);S-(iv)
8. Select the correct sense organ that helps us to taste ice cream.
- (A) Tongue (B) Eyes  
 (C) Ear (D) Nose
9. Select the food items with low nutritional value.




(D) All of these

10. Which of the following activities is correctly matched with its place?  
 (A) Brushing in drawing room (B) Bathing in kitchen  
 (C) Eating in washroom (D) Sleeping in bedroom
11. Which of the following statements is incorrect?  
 (A) Woollen clothes are used in summer season.  
 (B) Raincoat is used during rainy season.  
 (C) Cotton clothes are most preferably worn during winters.  
 (D) Both (A) and (C)



12. Select the good habit from the given pictures.



(D) Both (A) and (B)

13. How many are the correct examples of living things in the box given below?

Chair, Table, Rabbit, Cow, Butterfly, Teddy bear, Bottle, Rose plant,  
Fan, Bus, Bird, Cat, Ship

(A) Six

(B) Eight

(C) Twelve

(D) Five

14. Select the incorrect match of animals with its home.



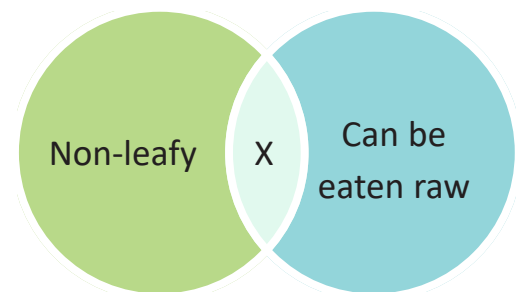
15. Study the given Venn diagram and select the option that correctly identifies the food item "X":

(A) Potato

(B) Lettuce

(C) Spinach

(D) Tomato







16. Select the CORRECT statement.

(A) When days are very cold we sit under the ceiling fan.

(B) We wear woollen clothes during rainy seasons.

(C) Sometimes after it rains, we see a rainbow up in the sky.

(D) When days are very hot we need raincoats to protect ourselves.

17. Animals that live in forests are called \_\_\_\_\_ .  
 (A) Pet animals (B) Wild animals  
 (C) Water animals (D) Domestic animals
18. Identify a living thing that you see in your garden.  
 (A)  (B)   
 (C)  (D) 
19. Tiffin wrapper, banana peel and leftover food must be thrown in the \_\_\_\_\_ .  
 (A) School (B) Classroom  
 (C) Washroom (D) Dustbin
20. The picture shown here is used for \_\_\_\_\_ .  
 (A) Running (B) Crossing road  
 (C) Sleeping (D) Playing
21. Ram is eating his lunch. Where should he eat his lunch?  
 (A) Kitchen (B) Bathroom  
 (C) Dining room (D) Study room
22. Look at the given picture and name the meal that we take during this time.




- (A) Breakfast (B) Lunch  
 (C) Brunch (D) Dinner
23. A joint family consists of \_\_\_\_\_ .  
 (A) Grandfather and grandmother (B) Father and mother  
 (C) Uncle and aunt (D) All of these

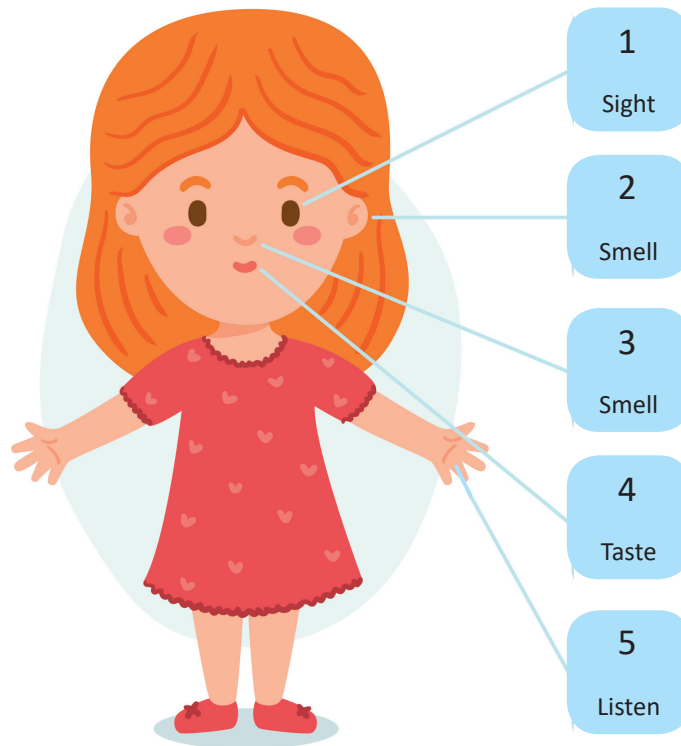
24. The sense organ which helps us in listening music is \_\_\_\_\_ .  
(A) Eye (B) Nose  
(C) Tongue (D) Ear
25. Animals need home to protect themselves from \_\_\_\_\_.  
(A) Other animals (B) Rain  
(C) Heat (D) All of these

Section C (Competency Enhancement)

26. Rahul went to the market. When he was returning home, the sun was high in the sky. Identify the time of the day he was returning.  
(A) Afternoon (B) Morning  
(C) Evening (D) None of these
27. Tina lives on a hill. One morning, after waking up, she goes to the balcony. She is filled with joy on seeing snowfall. She shouts, “\_\_\_\_\_ season is here”.  
(A) Autumn (B) Rainy  
(C) Winter (D) Summer
28. Select the festival that is celebrated in the same month as the festival shown here.



29. While playing in the park, Sonal saw a money plant, a pomegranate plant, and a pumpkin plant. Which of the given plants will grow along the ground?
- (A) Money plant (B) Pomegranate plant  
(C) Pumpkin plant (D) None of these
30. Simran was asked to write the functions of the sense organs on a picture of a girl as shown here. But, mistakenly some of the functions have been incorrectly matched. Identify them and select the correct option.



- (A) 1 and 3 (B) 2 and 5  
(C) 4 and 5 (D) 2 and 3

