



School Level Examination  
SLE 2023

**GRADE**  
**2**

**CYBER**

Subject Code:

5	0	1
---	---	---

Total Questions: 30

Time: 1 hour

**DO NOT OPEN THIS BOOKLET UNTIL INSTRUCTED TO DO SO**

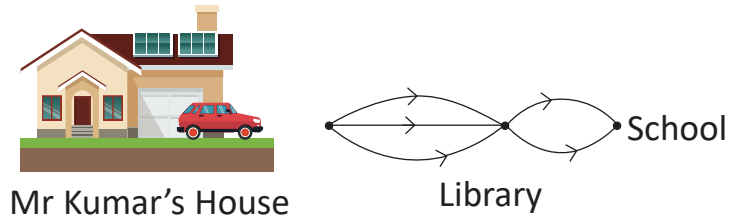
- All questions are compulsory.
- Read the instructions on the **ANSWER SHEET** and fill in your **NAME, CLASS** and **OTHER INFORMATION**.
- To mark your choice of answer by darkening the circles in the **ANSWER SHEET**, use an **HB PENCIL** only.
- You **MUST** record your answers on the **ANSWER SHEET** only.
- There are **30 MULTIPLE CHOICE QUESTIONS**. Use the information provided to choose the **BEST** possible answer among the four options. On your **ANSWER SHEET** fill in the circle that matches your answer.
- Marks are **NOT** deducted for incorrect answers.
- Return the **ANSWER SHEET** to the invigilator at the end of the examination.
- You are **NOT** allowed to use a calculator. You may use a ruler and spare paper for rough work.

CYBER

This question paper contains a total of 30 questions divided into three sections - A, B and C.

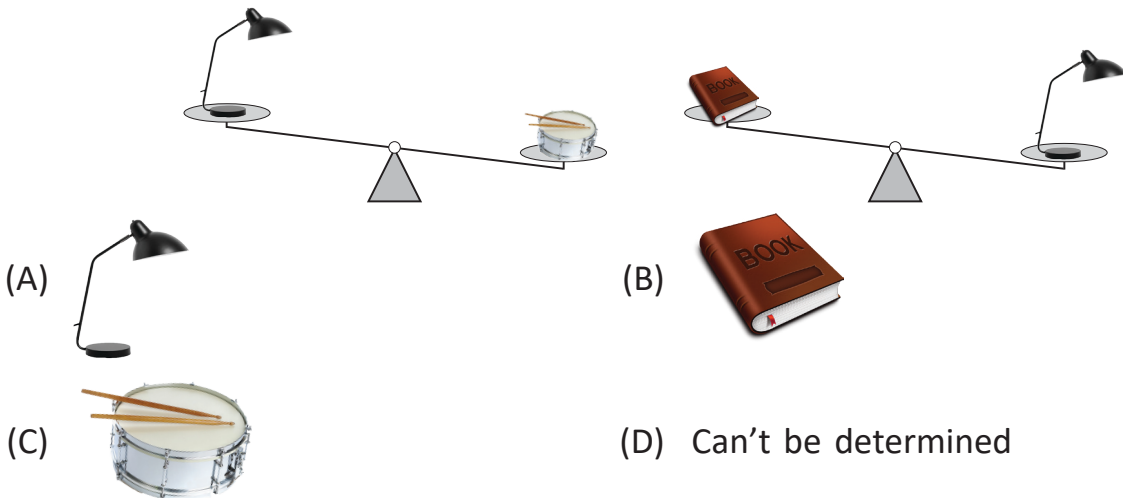
Section A (Logical Reasoning)

1. Mr Kumar needs to drive to the School via Library by his car from his house. The given figure shows the routes he can take.




How many different ways are there for Mr Kumar to go to the School?

- (A) 5      (B) 4  
(C) 8      (D) 6
2. Which of the following is the heaviest?



3. What will come next?



4. SMELL is to NOSE, as SOUND is to \_\_\_\_\_.

- (A) Ear      (B) Eye  
(C) Music      (D) Trumpet

5. Pick the odd one out.

- (A) Branch (B) Dirt  
(C) Leaf (D) Root

Section B (Subject Specific)

6. Which statement is INCORRECT?

- (A) A computer is a man-made machine.  
(B) A computer can store a lot of information.  
(C) A computer is a natural machine.  
(D) A computer never makes mistake.

7. Which of the following statements hold(s) true regarding the given picture?

- A. It is known as the brain of a computer.  
B. It is a processing device of a computer.  
(A) Only A (B) Only B  
(C) Both (A) and (B) (D) It is used to give input.




8. Match the following:

Column I	Column II
(a) Text tool	(i)
(b) Curve shape	(ii)
(c) Select	(iii)
(d) Polygon shape	(iv)
(e) Rounded rectangle shape	(v)
(f) Pentagon shape	(vi)

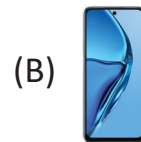
- (A) (a)→(ii), (b)→(iv), (c)→(i), (d)→(iii), (e)→(vi), (f)→(v)  
(B) (a)→(iii), (b)→(v), (c)→(ii), (d)→(iii), (e)→(vi), (f)→(i)  
(C) (a)→(iii), (b)→(iv), (c)→(ii), (d)→(i), (e)→(vi), (f)→(v)  
(D) (a)→(iv), (b)→(v), (c)→(ii), (d)→(vi), (e)→(i), (f)→(iii)

9. Which tool is used to draw the given scene in Tux Paint?



- (A) Fill tool
- (B) Quit tool
- (C) Undo tool
- (D) Magic tool

10. Shanya wants to play game - the given game. Choose the suitable device for her.



11. Computer does not get \_\_\_\_\_ after working for so many hours.

- (A) energy
- (B) tired
- (C) drinks
- (D) food

12. Computers are used in railways for \_\_\_\_\_.

- (A) Refrigeration
- (B) Preparation
- (C) Reservation
- (D) None of these





13. Computer helps in entertainment to \_\_\_\_\_.

- (A) play games
- (B) listen music
- (C) both (A) and (B)
- (D) None of these

14. Which of the following is called the brain of a computer?  
 (A) Keyboard (B) CPU  
 (C) Mouse (D) Monitor
15. I let you record your voice in a computer. Who am I?  
 (A) CPU (B) Printer  
 (C) Microphone (D) Monitor
16. Keyboard has many \_\_\_\_\_ on it.  
 (A) keys (B) locks  
 (C) switches (D) blocks
17. What do we call the area where we can draw shapes and pictures?  
 (A) Color area (B) Drawing area  
 (C) Empty area (D) Print area
18. Which tool is used to draw and give special effects in Tux Paint?  
 (A) Magic (B) Open  
 (C) Eraser (D) Move
19. Which of the following tool is used to draw a curve line in MS - Paint?  
 (A) Brush (B) Oval  
 (C) Line (D) Curve
20. Doctors use computer for \_\_\_\_\_.  
 (A) playing games (B) diagnosis of diseases  
 (C) listening music (D) booking tickets
21. Which of the following is a new product?  
 (A) Calculator (B) Computer  
 (C) Laptop (D) Robots
22. Which tool is used to give color to the shapes in MS Paint?  
 (A) Spray (B) Fill Color  
 (C) Pencil (D) Eraser
23. What cannot be drawn with the help of line tool?  
 (A) circle (B) square  
 (C) triangle (D) rectangle

24. What do you mean by clicking?
- (A) Move the scroll wheel
  - (B) Move the mouse left and right
  - (C) Pressing and releasing the left mouse button
  - (D) None of these

25. Match the following:

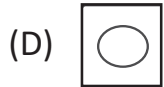
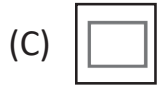
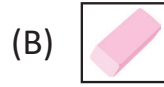
Column A	Column B
(i) 	(a) This tool lets you exit the application
(ii) 	(b) This tool helps to type text matter
(iii) 	(c) This tool allows you to draw or scribble something
(iv) 	(d) This tool erases text/lines

- (A) (i) – (d), (ii) – (b), (iii) – (a), (iv) – (c)
- (B) (i) – (d), (ii) – (c), (iii) – (a), (iv) – (b)
- (C) (i) – (c), (ii) – (a), (iii) – (d), (iv) – (b)
- (D) (i) – (b), (ii) – (d), (iii) – (a), (iv) – (c)

**Section C (Competency Enhancement)**

26. Meera has drawn a shape in Paint. Now, she wants to increase the size of the drawing. Which option should she use to do so?
- (A) Size
  - (B) Resize
  - (C) Rotate
  - (D) Flip
27. Vanshika wants to listen to music on a computer without causing any disturbance to others. Which device should she use to do so?
- (A) Headphones
  - (B) Speakers
  - (C) Monitor
  - (D) Keyboard

28. Ram wants to draw a freehand drawing in Paint. Which of the following tools will be used to do so?



29. Nimisha is doing some calculations on the computer. She realises that computer gives all the results correct. This means the computer always gives \_\_\_\_\_ result.

(A) Accurate

(B) Incorrect

(C) False

(D) Same

30. Ravina wants to save a drawing in Paint. Which option should she use to save the file quickly?

(A) By clicking on the File → Save option

(B) By pressing the Ctrl + S key

(C) Both (A) and (B)

(D) Paint automatically saves the file

