



School Level Examination
SLE 2023

GRADE
1

CYBER

Subject Code:

5	0	1
---	---	---

Total Questions: 30

Time: 1 hour

DO NOT OPEN THIS BOOKLET UNTIL INSTRUCTED TO DO SO

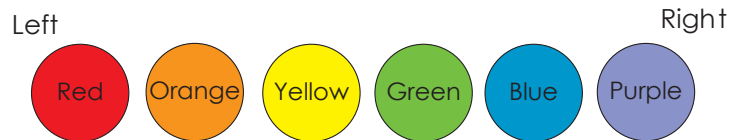
- All questions are compulsory.
- Read the instructions on the **ANSWER SHEET** and fill in your **NAME, CLASS** and **OTHER INFORMATION**.
- To mark your choice of answer by darkening the circles in the **ANSWER SHEET**, use an **HB PENCIL** only.
- You **MUST** record your answers on the **ANSWER SHEET** only.
- There are **30 MULTIPLE CHOICE QUESTIONS**. Use the information provided to choose the **BEST** possible answer among the four options. On your **ANSWER SHEET** fill in the circle that matches your answer.
- Marks are **NOT** deducted for incorrect answers.
- Return the **ANSWER SHEET** to the invigilator at the end of the examination.
- You are **NOT** allowed to use a calculator. You may use a ruler and spare paper for rough work.

CYBER

This question paper contains a total of 30 questions divided into three sections - A, B and C.

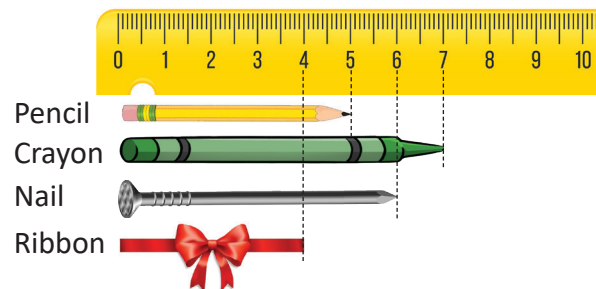
Section A (Logical Reasoning)

1. Which colour is in the fifth circle from the left?



- (A) Blue (B) Purple
(C) Yellow (D) Green

2. Which of the following is the shortest?



- (A) Ribbon (B) Pencil
(C) Nail (D) Crayon

3. If P buys a ticket for Q and R buys a ticket for S, then V will buy a ticket for _____.



- (A) U (B) W
(C) V (D) P

4. How many squares are there in the given figure?

- (A) 5 (B) 6
(C) 8 (D) 2



5. If I am facing North, then my right side is _____.

- (A) North (B) East
(C) South (D) West

Section B (Subject Specific)




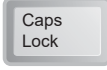
6. _____ are the main parts of a computer system.

- (A) Keyboard, Monitor, Mouse, Joystick
- (B) Speakers, Pen Drive, Monitor, Keyboard
- (C) Keyboard, Monitor, Mouse, CPU
- (D) Keyboard, Mouse, Printer, Laser Pen

7. Which tool will you use to start a new drawing?


- (A) 
- (B) 
- (C) 
- (D) 

8. Match the following:


Column I	Column II
(a) 	(i) Spacebar key
(b) 	(ii) Alphabet key
(c) 	(iii) Capital Letter
(d) 	(iv) Number key

- (A) (a)→(i), (b)→(iv), (c)→(iii), (d)→(ii)
- (B) (a)→(ii), (b)→(iii), (c)→(i), (d)→(iv)
- (C) (a)→(ii), (b)→(iv), (c)→(i), (d)→(iii)
- (D) (a)→(ii), (b)→(iv), (c)→(i), (d)→(iii)

9. I can play songs, set alarms, answer calls, etc. Who am I?

- (A) 
- (B) 
- (C) 
- (D) 

10. Label the parts of the Tux Paint window.



- (A) i → Drawing Canvas, ii → Toolbox, iii → Help Area, iv → Selector Pane
- (B) i → Help Area, ii → Drawing Canvas, iii → Toolbox, iv → Selector Pane
- (C) i → Toolbox, ii → Drawing Canvas, iii → Help Area, iv → Selector Pane
- (D) i → Toolbox, ii → Drawing Canvas, iii → Selector Pane, iv → Help Area

11. Machines run on _____.

- (A) fuel
- (B) coal
- (C) battery
- (D) All of these

12. Which of the following is used to wash our clothes?

- (A) Refrigerator
- (B) Washing machine
- (C) Microwave
- (D) AC

13. Computer is a/an _____ machine.

- (A) natural
- (B) fuel
- (C) electronic
- (D) All of these

14. _____ is not a part of the computer.

- (A) Keyboard
- (B) CPU
- (C) Mouse
- (D) Pencil

15. I look like an LCD and display what you type. Who am I?

- (A) CPU
- (B) Printer
- (C) Speakers
- (D) Monitor

16. How many alphabet keys are there on the keyboard?

(A) 26	(B) 25
(C) 24	(D) 27

17. Which of the following parts of computer is used to print on paper?

(A) CPU	(B) Printer
(C) Speakers	(D) Monitor

18. What is the function of the mouse of a computer?

(A) It is used to write on the computer
(B) It is used to move the pointer
(C) It is used to display on the computer
(D) It is used to record voice

19. Which tool is used to paste a pre-drawn picture such as a bird, flower, tree etc. in Tux Paint?

(A) Magic	(B) Quit
(C) Stamp	(D) Move

20. Which of the following tool is used to draw a free hand drawing in MS - Paint?

(A) Pencil	(B) Eraser
(C) Line	(D) Ellipse

21. Computer is used for teaching various subjects in _____.

(A) hospitals	(B) banks
(C) schools	(D) airports

22. Which of the following is a new product?

(A) Clock	(B) Analog Watch
(C) Wall clock	(D) Smart watch





23. What is the default Foreground color in MS Paint?

(A) Red	(B) White
(C) Black	(D) Blue

24. Which tool is used to spray colors in MS paint?

(A) Airbrush	(B) Pencil
(C) Fill color	(D) Brush

25. Match the following:

Column A	Column B
(i)  Magic	(a) This tool lets you draw straight lines
(ii)  Fill	(b) This tool fills the areas within the boundaries of your drawing with a solid colour
(iii)  Lines	(c) This tool allows you to draw some simple filled and unfilled shapes
(iv)  Shapes	(d) This tool provides countless number of special visual effects

- (A) (i) – (d), (ii) – (b), (iii) – (a), (iv) – (c)
 (B) (i) – (d), (ii) – (c), (iii) – (a), (iv) – (b)
 (C) (i) – (c), (ii) – (a), (iii) – (d), (iv) – (b)
 (D) (i) – (b), (ii) – (d), (iii) – (a), (iv) – (c)

Section C (Competency Enhancement)

26. Divya wants to draw a triangle in Tux Paint. She does not know the tool used for this purpose. Suggest her the tool used to do so.

- (A) Magic Tool (B) Shapes Tool
 (C) Paint Tool (D) New Tool

27. Anupam wants to delete a portion of his drawing. Suggest him which tool will enable him to do so.

- (A)  (B) 
 (C)  (D) 

28. Ramesh wants to type the following text in his drawing:

A B C 8 E F G 7 I J K L 9

He is unable to give space between the letters. Suggest him the key that he can use for giving space.


- (A) Backspace key (B) Enter key
 (C) Spacebar key (D) Delete Key

29. Nikita is a student in class 1. Her computer teacher tells her to categorise the following keys as numeric, alphabet, and special keys. She is unable to do that. As a good friend, help her categorise the keys.



- (A) (i) → Special Key, (ii) → Numeric Key, (iii) → Alphabet Key
 (B) (i) → Numeric Key, (ii) → Special Key, (iii) → Alphabet Key
 (C) (i) → Alphabet Key, (ii) → Special Key, (iii) → Numeric Key
 (D) (i) → Numeric Key, (ii) → Alphabet Key, (iii) → Special Key

30. Sameer wants to draw the following drawing in Paint. Suggest him any two shapes that he can use to easily make the same drawing.



- (A) Rectangle and Triangle
 (B) Rectangle and Diamond
 (C) Oval and Rounded Rectangle
 (D) Rounded Rectangle and Rectangle



coding



Click



Presentation



web

