



School Level Examination
SLE 2022

GRADE
3

SCIENCE

Subject Code:

3	0	1
---	---	---

Total Questions: 30

Time: 1 hour

DO NOT OPEN THIS BOOKLET UNTIL INSTRUCTED TO DO SO

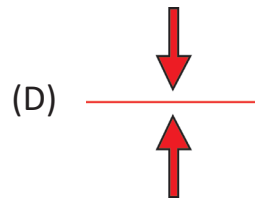
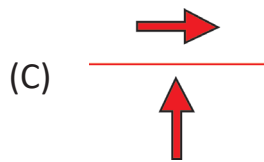
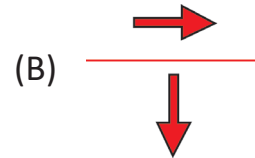

- All questions are compulsory.
- Read the instructions on the **ANSWER SHEET** and fill in your **NAME, CLASS** and **OTHER INFORMATION**.
- To mark your choice of answer by darkening the circles in the **ANSWER SHEET**, use an **HB PENCIL** only.
- You **MUST** record your answers on the **ANSWER SHEET** only.
- There are **30 MULTIPLE CHOICE QUESTIONS**. Use the information provided to choose the **BEST** answer among the four possible options. On your **ANSWER SHEET** fill in the circle that matches your answer.
- Marks are **NOT** deducted for incorrect answers.
- Return the **ANSWER SHEET** to the invigilator at the end of the examination.
- You are **NOT** allowed to use a calculator. You may use a ruler and spare paper for rough work.

SCIENCE

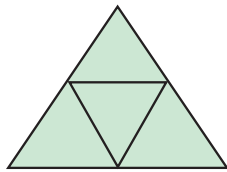
Section A (Logical Reasoning)

(This section contains 5 multiple choice questions. Each question has four choices (A), (B), (C) and (D), out of which only ONE is correct.)

1. Which option shows the correct reflection of the arrows?



2. How many triangles are there in the figure given below?



(A) 4

(B) 5

(C) 6

(D) 7

3. There is 8 in my hundred's place.

There is 2 in my one's place.

There is 9 in my ten's place.

Which number am I?

(A) 829

(B) 928

(C) 289

(D) 892

4. Choose the animal which is different from the rest.

(A) Swan

(B) Crocodile

(C) Chicken

(D) Shark

5. Complete the pattern.

Jeans : Clothing :: Sculpture : ?

- | | |
|-----------|------------|
| (A) Art | (B) Statue |
| (C) Slack | (D) Figure |

Section B (Subject Specific)

(This section contains 25 multiple choice questions. Each question has four choices (A), (B), (C) and (D), out of which only ONE is correct.)

6. The kind of work a person does to earn money is called _____ .

- | | |
|----------------|------------------|
| (A) position | (B) skill |
| (C) occupation | (D) walking work |

7. Sound is caused by _____ .

- | | |
|------------|----------------|
| (A) force | (B) vibrations |
| (C) metals | (D) rocks |

8. Choose the non-luminous objects from the following options:

- | | |
|------------|----------|
| (A) Candle | (B) Moon |
| (C) Book | (D) Sun |

9. The hard part of our body is _____ .

- | | |
|-----------|-------------|
| (A) heart | (B) blood |
| (C) teeth | (D) muscles |

10. The kings and queens travelled through _____ .

- | | |
|--------------|------------|
| (A) boats | (B) cars |
| (C) chariots | (D) tongas |

11. Which part of the plant is responsible for making food?

- | | |
|------------|-----------|
| (A) Flower | (B) Fruit |
| (C) Root | (D) Leaf |

12. Unscramble the given options to find out the animal that does NOT live in water.

(A) M C A E L

(B) U R T T L E

(C) S H I F

(D) H A W E L

13. By which of the following bird is the given type of nest prepared?



(A) Baya weaver

(B) Sparrow

(C) Woodpecker

(D) Hen

14. Identify the type of human body system from the statements given below.

(i) I provide shape to the body.

(ii) I protect delicate organs of human body.

(iii) I am surrounded by muscles and cartilages.

(A) Muscular system

(B) Digestive system

(C) Nervous system

(D) Skeletal system

15. Choose the odd one out.

(A) Cabbage

(B) Carrot

(C) Spinach

(D) Coriander leaves

16. Some people keep travelling throughout the year and they take their house and belongings along. The type of house they live in is _____ .



17. Arrange the mode of transports in order of increasing speed (from the slowest to the fastest).

Aeroplane, Ship, Bullock cart, Bullet train, Rajdhani train

(A) Bullock cart, Aeroplane, Rajdhani train, Bullet train, Ship

(B) Ship, Bullet train, Rajdhani train, Aeroplane, Bullock cart

(C) Bullock cart, Ship, Rajdhani train, Bullet train, Aeroplane

(D) Ship, Bullock cart, Rajdhani train, Bullet train, Aeroplane

18. In addition to the rock particles, the soil contains _____ .

(A) air and water

(B) water and plants

(C) minerals, organic matter, air and water

(D) All of these

19. The Sun attracts all the other objects in the Solar System because _____ .
- (A) of its magnetic pull
 - (B) of the magnetic pull of other planet
 - (C) it is at the centre of the Solar System
 - (D) the Sun is so large, that its gravity attracts everything
20. Which of the following birds can fly to great heights?
- (A) Sparrow
 - (B) Ostrich
 - (C) Hen
 - (D) Kite
21. Which of the following is an example of a herbivore?
- (A) Crocodile
 - (B) Eagle
 - (C) Wolf
 - (D) Elephant
22. On a cloth drying stand, few clothes were drying outdoors in the Sun. Which of the following types of cloth will dry first?
- (A) Cotton
 - (B) Wool
 - (C) Nylon
 - (D) Jeans
23. What do you understand by fertile soil?
- (A) Soil that helps plants to get nutrients and grow healthy
 - (B) Soil that gives fruits
 - (C) Soil that has water
 - (D) Soil that has air
24. I revolve around the Sun. I am the brightest and the hottest member of the Solar System. Who am I?
- (A) Blue planet
 - (B) Red planet
 - (C) Evening star
 - (D) Pole star

25. Which of the following statements is INCORRECT?
- (A) Snow and ice both are the same form of water.
 (B) On heating, water changes into steam.
 (C) Evaporation and condensation are reverse of each other.
 (D) On heating, water changes into ice.
26. Light travels in a straight line. Is it true?
- (A) Yes (B) No
 (C) Not always (D) It depends on atmosphere.
27. What happens when living things decompose?
- (A) They grow healthy and strong. (B) They have babies.
 (C) They store up fat for the winter. (D) Their parts break down into the soil.
28. Complete the table
- Grass : Fibrous root :: Carrot : ?
- (A) Fibrous root (B) Taproot
 (C) Standard root (D) None of these
29. Which of the following is not needed for photosynthesis?
- (A) Iodine solution (B) CO₂
 (C) Chlorophyll (D) Water
30. Sheena took three pots P, Q and R and filled pot P with sand, pot Q with clay and pot R with loam. She planted three saplings in them. Which is most likely to grow into a healthy plant?
- (A) The sapling in pot P (B) The sapling in pot Q
 (C) The sapling in pot R (D) None will grow.

