



School Level Examination
SLE 2022

GRADE
2

CYBER

Subject Code:

5	0	1
---	---	---

Total Questions: 30

Time: 1 hour

DO NOT OPEN THIS BOOKLET UNTIL INSTRUCTED TO DO SO

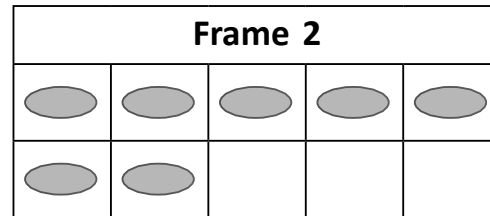
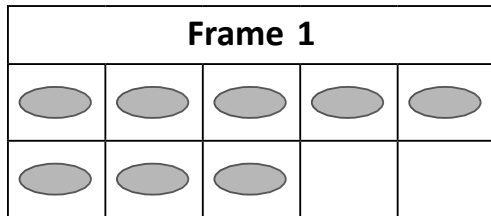
- All questions are compulsory.
- Read the instructions on the **ANSWER SHEET** and fill in your **NAME, CLASS** and **OTHER INFORMATION**.
- To mark your choice of answer by darkening the circles in the **ANSWER SHEET**, use an **HB PENCIL** only.
- You **MUST** record your answers on the **ANSWER SHEET** only.
- There are **30 MULTIPLE CHOICE QUESTIONS**.
Use the information provided to choose the **BEST** answer among the four possible options. On your **ANSWER SHEET** fill in the circle that matches your answer.
- Marks are **NOT** deducted for incorrect answers.
- Return the **ANSWER SHEET** to the invigilator at the end of the examination.
- You are **NOT** allowed to use a calculator.
You may use a ruler and spare paper for rough work.

CYBER

Section A (Logical Reasoning)

(This section contains 5 multiple choice questions. Each question has four choices (A), (B), (C) and (D), out of which only ONE is correct.)

1. There are 8 dots on frame 1 and 7 dots on frame 2. A full frame has 10 dots. How many more dots do you need in both the frames in total to make 10 each?



- (A) 4
(B) 5
(C) 6
(D) 7
2. How will you show the given pattern using letters?



- (A) SSTTSSSTSSS
(B) STTTSTTTSTTTT
(C) STSSTTSSSTTT
(D) STSTSTSTSTSTS

3. stands for 5, stands for _____.

- (A) 10
(B) 12
(C) 30
(D) 15

4. Find the number which will come in place of “?”.

$$\underline{\quad ? \quad} + \text{★} = \boxed{10}$$

$$\text{★} - 7 = \boxed{0}$$

- (A) 2
(B) 3
(C) 4
(D) 5

5. What is the greatest whole number you can make with the following digits?




4 9 8

- (A) 489 (B) 984
(C) 948 (D) 498

Section B (Subject Specific)

(This section contains 25 multiple choice questions. Each question has four choices (A), (B), (C) and (D), out of which only ONE is correct.)

6. Match the pictures given in column I with their names in column II.

Column I		Column II	
(i)		(a)	Hard Disk
(ii)		(b)	Pen Drive
(iii)		(c)	Floppy Disk

- (A) (i)-(a), (ii)-(b), (iii)-(c) (B) (i)-(a), (ii)-(c), (iii)-(b)
(C) (i)-(c), (ii)-(a), (iii)-(b) (D) (i)-(b), (ii)-(c), (iii)-(a)

7. Arya wants to draw a perfect circle. She should press _____ key on the keyboard while dragging the left mouse button.

- (A)  (B) 
(C)  (D) 

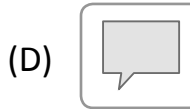
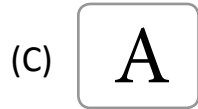
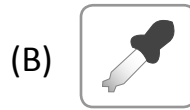
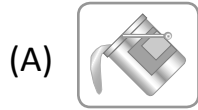
8. The sound that the mouse buttons make when pressed is called _____.

- (A) Quack (B) Bang
(C) Beep (D) Click

9. While typing on the keyboard, what is the most important?

- (A) Fingers curved (B) Back straight
(C) Feet flat on the floor (D) All of these

10. You use this tool to fill colour in your drawings. Which is it?



11. Using a computer, we can _____.

(A) Forecast weather

(B) Eat food

(C) Make juice

(D) Swim in a pool

12. Manas shuts down the computer. Then he switches OFF all the power buttons. Choose the statement which gives the correct order of switching OFF the power buttons.

(A) Switch OFF the monitor, switch OFF the UPS, switch OFF the power supply

(B) Switch OFF the UPS, switch OFF the monitor, switch OFF the power supply

(C) Switch OFF the power supply, switch OFF the UPS, switch OFF the monitor

(D) Switch OFF the UPS, switch OFF the power supply, switch OFF the monitor

13. In universities, computers are used to maintain records of all the _____.

(A) Passengers

(B) Patients

(C) Students

(D) Drivers

14. Scientists at the Indian Space Research Organization use computers to _____.

(A) Design satellites and rockets

(B) Launch satellites and rockets

(C) Control movement of satellites in space

(D) All of these

15. Tux Paint is a _____ software that we can download from the internet.

(A) Free

(B) Bad

(C) Paid

(D) Cleaning

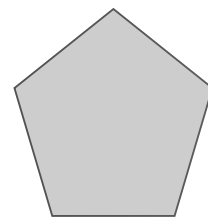
16. Choose the correct steps to draw the given shape in Tux Paint.

(A) *Tool box → Shapes → Filled Pentagon*


(B) *Tool box → Filled Pentagon → Shapes*


(C) *Filled Pentagon → Shapes → Square*

(D) *Shapes → Tool box → Filled Pentagon*







17. The mouse action used to select multiple items on the screen at once with the Shift key pressed is _____.
- (A) Right click (B) Left click
(C) Double click (D) Middle click
18. Aryan wants to draw the picture given below in Tux Paint. Which tool will he use?



- (A)  Lines
- (B)  Stamp
- (C)  Text
- (D)  Shapes

19. Identify the correct order of steps to open Notepad.
- (A) *Start → Accessories → All Programs → Notepad*
 (B) *Start → All Programs → Accessories → Notepad*
 (C) *All Programs → Start → Accessories → Notepad*
 (D) *Accessories → All Programs → Start → Notepad*
20. A Notepad file name has _____ extension.
- (A) .doc (B) .xls
(C) .txt (D) .bmp

21. Match the shape tools given in column I with their names in column II.

Column I		Column II	
(i)		(p)	Diamond
(ii)		(q)	Right arrow
(iii)		(r)	Rounded rectangle
(iv)		(s)	Five-point star

- (A) (i)-(r), (ii)-(p), (iii)-(s), (iv)-(q) (B) (i)-(q), (ii)-(s), (iii)-(p), (iv)-(r)
 (C) (i)-(p), (ii)-(r), (iii)-(q), (iv)-(s) (D) (i)-(s), (ii)-(q), (iii)-(r), (iv)-(p)

22. Amit is reading a poem on the monitor. Which set of keys will he use to move to the next line?

- (A) Space bar (B) Number keys
 (C) Arrow keys (D) Alphabet keys

23. Name this icon.



- (A) Facebook (B) Gmail
 (C) Youtube (D) Google

24. Which of the following is not a search engine?

- (A) Google (B) Yahoo
 (C) Bing (D) Microsoft Edge

25. Which of the following statements are true?

- (i) Desktop is the first screen after switching on the computer.
 (ii) The main power supply button should be switched off at the end.
 (iii) CPU is called the brain of a computer.
 (A) Only statement (i) is true (B) Statements (i) & (iii) are true
 (C) Statements (i) & (ii) are true (D) Statements (i), (ii) & (iii) are true


26. What is the key to navigate the Web?

- (A) LRU (B) ULR
(C) RUL (D) URL

27. Identify the input device used to scan photos.



28. Write the first letter of each picture and arrange the letters to get the name of an output device.



- (A) PRINTER (B) PLOTTER
(C) MONITOR (D) PROJECTOR

29. What is a robot that looks like a human called?

- (A) Android (B) Steroid
(C) Asteroid (D) Humanoid

30. Identify the given device.



- (A) Alexa (B) TV
(C) Mobile phone (D) None of these

