



School Level Examination  
SLE 2022

**GRADE**  
**1**

**CYBER**

Subject Code: 

5	0	1
---	---	---

Total Questions: 30

Time: 1 hour

**DO NOT OPEN THIS BOOKLET UNTIL INSTRUCTED TO DO SO**

- All questions are compulsory.
- Read the instructions on the **ANSWER SHEET** and fill in your **NAME, CLASS** and **OTHER INFORMATION**.
- To mark your choice of answer by darkening the circles in the **ANSWER SHEET**, use an **HB PENCIL** only.
- You **MUST** record your answers on the **ANSWER SHEET** only.
- There are **30 MULTIPLE CHOICE QUESTIONS**.  
Use the information provided to choose the **BEST** answer among the four possible options. On your **ANSWER SHEET** fill in the circle that matches your answer.
- Marks are **NOT** deducted for incorrect answers.
- Return the **ANSWER SHEET** to the invigilator at the end of the examination.
- You are **NOT** allowed to use a calculator.  
You may use a ruler and spare paper for rough work.

CYBER

Section A (Logical Reasoning)

(This section contains 5 multiple choice questions. Each question has four choices (A), (B), (C) and (D), out of which only ONE is correct.)

1. Arrange the following set of numbers: 21, 25, 5, and 70 in increasing order.

(A) 5, 21, 25, 70

(B) 70, 25, 21, 5

(C) 25, 5, 70, 21

(D) 21, 25, 5, 70

2. Choose the correct reverse order of the given letters.

ABCD

(A) BADC

(B) CABD

(C) DCBA

(D) ADBC

3. Mark the image that represents the following:

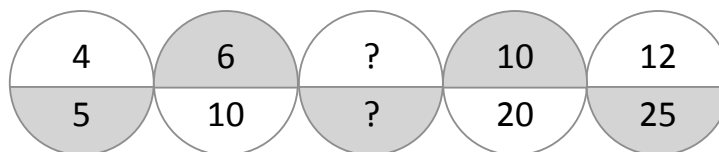
Something you eat is situated between something you throw and something you read.



4. Which shape fits into the missing part of the figure?



5. What is the missing number in the given series below?



(A) 8, 15


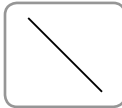


(B) 12, 15

(C) 15, 8

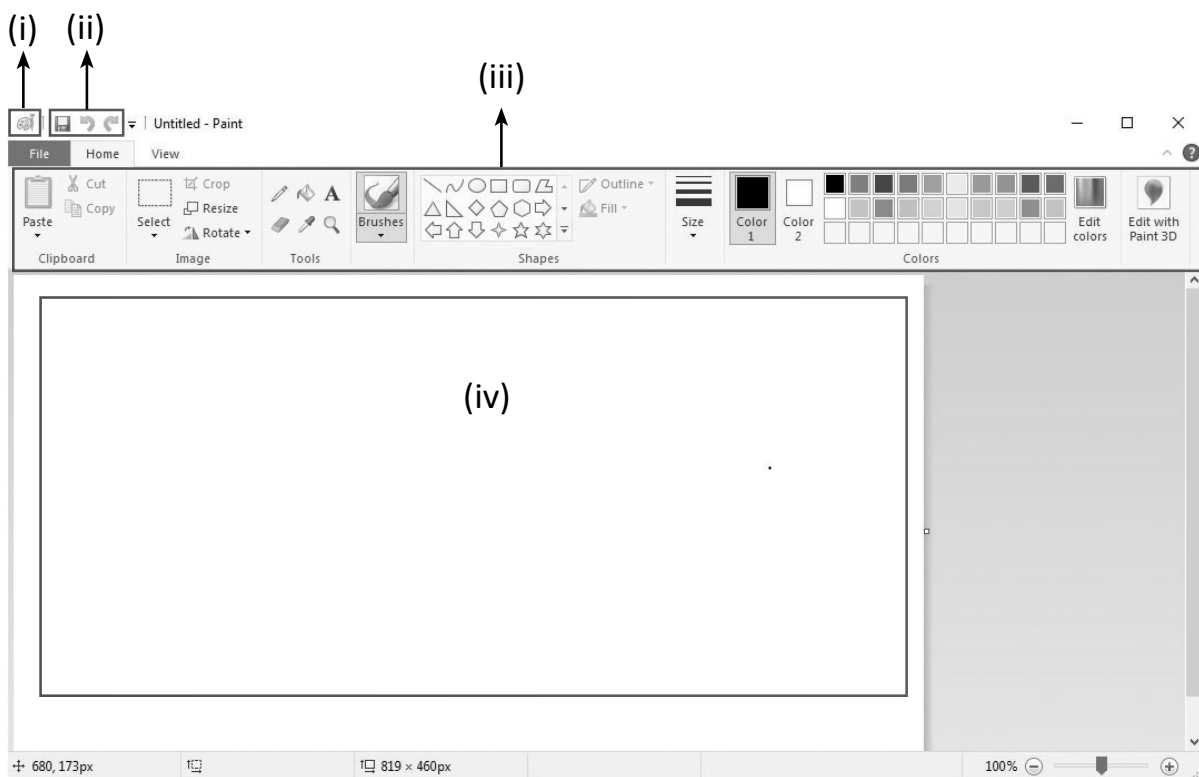
(D) 15, 12

Section B (Subject Specific)





(This section contains 25 multiple choice questions. Each question has four choices (A), (B), (C) and (D), out of which only ONE is correct.)

6. We can listen to \_\_\_\_\_ on the computer.  
 (A) Sums (B) Colour  
 (C) Object (D) Music
7. UPS stands for \_\_\_\_\_.  
 (A) Unbearable Power Supply (B) Uninterruptible Power Supply  
 (C) Unique Power Supply (D) Upper Power Supply
8. Reema wants to record her song on the computer. Which part of the computer will she use?  
 (A) Mouse (B) Microphone  
 (C) Monitor (D) Printer
9. You have to type the word 'AUSTRALIA' with 2 spaces between each letter. How many times will you press the Spacebar key?  
 (A) 12 times (B) 14 times  
 (C) 16 times (D) 18 times
10. The correct way to take care of a mouse is by \_\_\_\_\_.  
 (A) Holding the mouse lightly  
 (B) Pressing gently to click  
 (C) Placing a mouse pad beneath the mouse  
 (D) All of the above
11. We use this tool to draw a straight line. It is the \_\_\_\_\_ tool.
- |   |  |
|---|--|
| (A)  | (B)  |
| (C)  | (D)  |
12. Paint is a \_\_\_\_\_ program with which we make colourful drawings.  
 (A) Typing (B) Drawing  
 (C) Clicking (D) Playing

13. We should NOT keep the computer \_\_\_\_\_.
- (A) Clean (B) Dirty  
(C) Tidy (D) Dust-free
14. We \_\_\_\_\_ the keys to type letters, numbers and sentences.
- (A) Pull (B) Bang  
(C) Break (D) Press
15. Given below is a Paint window. Some of the components are marked with numbers. Choose the correct number and name match from the options.







	(i)	(ii)	(iii)	(iv)
(A)	Quick Access Toolbar	Paint Button	Drawing area	Ribbon
(B)	Paint Button	Quick Access Toolbar	Ribbon	Drawing area
(C)	Drawing area	Paint Button	Quick Access Toolbar	Ribbon
(D)	Paint Button	Ribbon	Quick Access Toolbar	Drawing area

16. Choose the correct steps to save a drawing in Paint.
- (A)  → Type File Name → Select Save option → Click Save
- (B)  → Select Save option → Type File Name → Click Save
- (C)  → Type File Name → Click Save → Select Save option
- (D) Type File Name →  → Click Save → Select Save option

17. What can I use to wash clothes?

- (A) Washing Machine                      (B) Car  
(C) Pen    (D) Bike


18. Which of the following is a man-made thing?

- (A)                       (B) 
- (C)                       (D) 

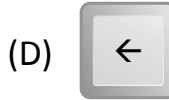
19. Other name for Enter key is \_\_\_\_\_.

- (A) Alphabet key                              (B) Number key  
(C) Spacebar key                              (D) Return key



20. You have drawn the following shapes in Paint. You want to fill colour in them. Which shape will you be able to fill properly?

- (A)                       (B) 
- (C)                       (D) 

21. Which key is used to move the cursor to the next line?



22. Choose the incorrect pair.



23. Which bar is present at the bottom of the Paint window?

(A) Quick Access Toolbar (B) Status Bar

(C) Color Bar (D) Ribbon

24. What is the first screen that appears after starting a computer called?

(A) Program (B) Icons

(C) Desktop (D) Wallpaper

25. There are \_\_\_\_\_ Numeric keys on the keyboard.

(A) 15 (B) 10

(C) 30 (D) 18

26. Which of the following icon is used to view online videos on mobile?



27. What enables us to send and receive messages within a few seconds?

- (A) e-learning (B) e-book  
(C) e-shopping (D) e-mail

28. A \_\_\_\_\_ can store more information than a CD.

- (A) UPS (B) Printer  
(C) Monitor (D) DVD

29. The mouse is used to give \_\_\_\_\_ to the computer.

- (A) money (B) food  
(C) commands (D) drinks

30. We can make beautiful drawings and paintings in \_\_\_\_\_.

(A)  MS Word

(B)  MS Paint

(C)  MS Excel

(D)  MS PowerPoint

